

Random Variable:

A random variable is a variable whose value is determined by the outcome of an experiment.

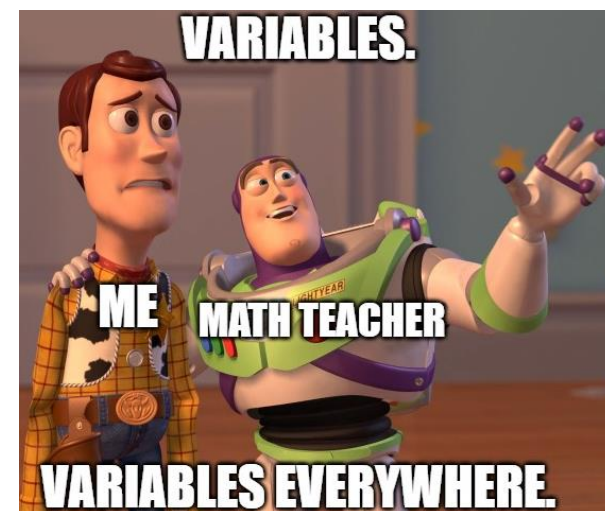
Example:

Flip a fair coin twice, and let X be the number of tails that occur.



$$S = \{HH, HT, TH, TT\}$$

X	0		
-----	---	--	--



Probability Distribution of a Random Variable:

It's a table of all the values of a random variable along with their associated probabilities.

Example: Using the previous random variable,

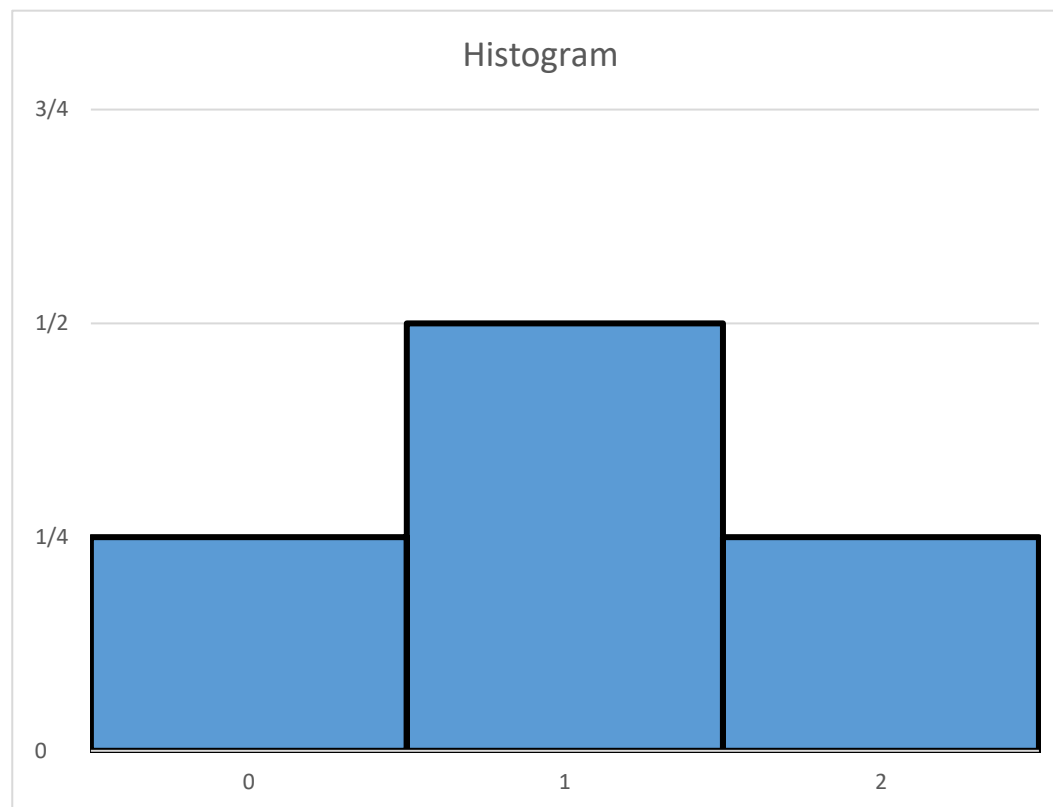
$$S = \{HH, HT, TH, TT\}$$

X	0	1	2
$P(X)$	$\frac{1}{4}$		

Histogram of a Random Variable:

It's a special bar graph of the probability distribution where the bars are centered at the values of the random variable, adjacent bars touch, and the area of the bar is equal to the probability that the random variable takes on that particular value.

Example: Using the previous random variable and distribution,





Expected Value of a Random Variable:

For X a random variable with probability distribution

X	x_1	x_2	x_3	\dots	x_n
$P(X)$	p_1	p_2	p_3	\dots	p_n

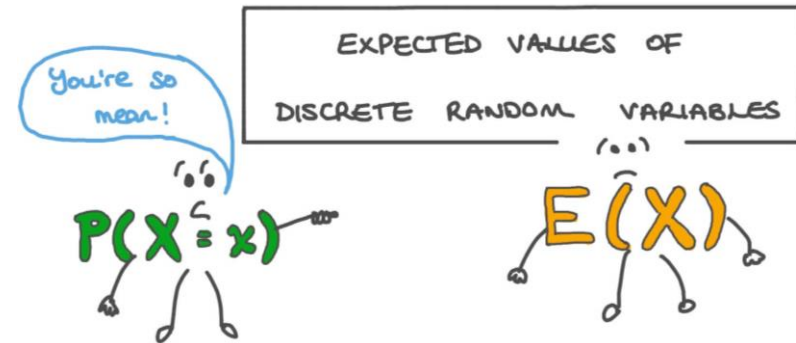
, the expected value of X , $E(X)$, is defined as $E(X) = x_1p_1 + x_2p_2 + x_3p_3 + \dots + x_np_n$.

Example: Using the previous random variable and distribution,

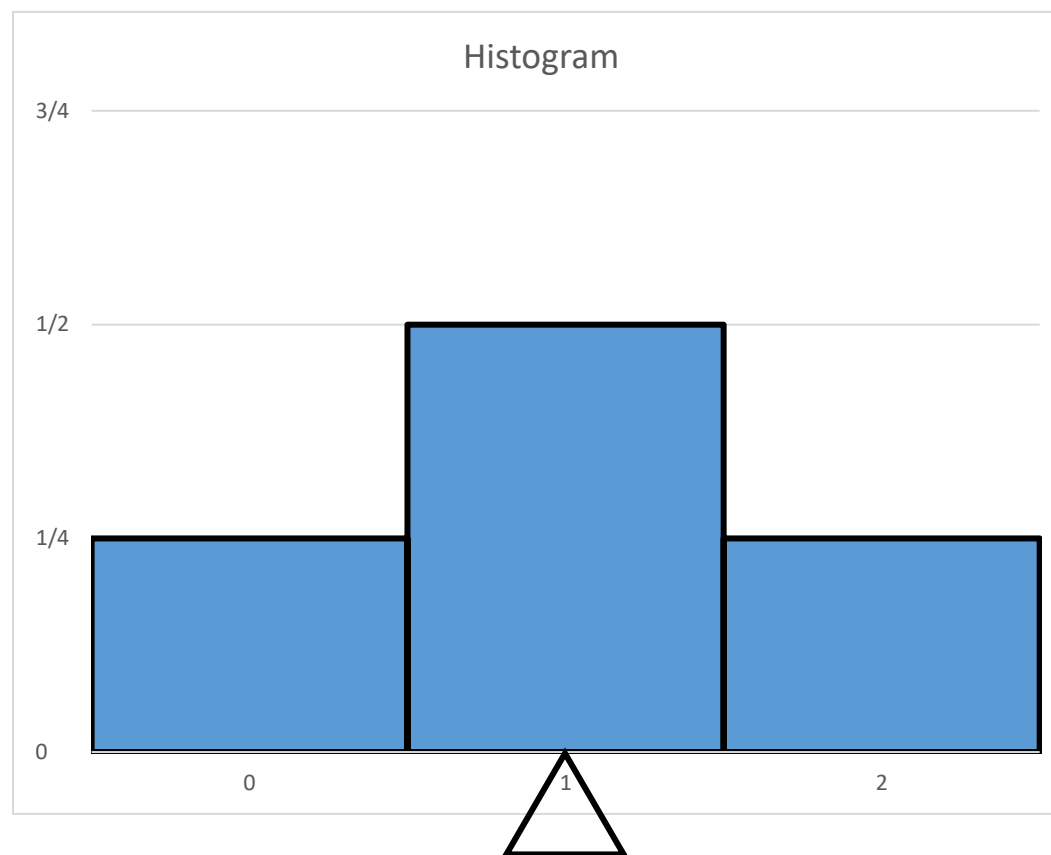
X	0	1	2
$P(X)$	$\frac{1}{4}$	$\frac{1}{2}$	$\frac{1}{4}$

$$E(X) = 0 \cdot \frac{1}{4} + 1 \cdot \frac{1}{2} + 2 \cdot \frac{1}{4} =$$

What does $E(X)$ mean or represent?



Geometrically, it's the balance position on the horizontal axis of the histogram:




More practically, it represents the long-term average value of X .

If the experiment is performed n times with X taking on the values X_1, X_2, \dots, X_n ,

then the average value of X would be $\frac{X_1 + X_2 + \dots + X_n}{n}$.

For large values of n , the average value of X will be close to $E(X)$, and the bigger n gets, the closer the average value of X will get to $E(X)$.

So in our example, if the experiment of flipping a fair coin twice and recording the number of tails is done a bunch of times, the average number of tails per trial will be close to 1.



Examples:

- 1. In a game, you roll a fair die. If you roll a 1, you win \$1; if you roll a 2, you win \$2; if you roll a 3, you win \$3. If you roll a 4, 5, or 6, you win nothing. Determine your expected winnings from one play of the game.**

Let X be your winnings from one play of the game.

X	\$1	\$2	\$3	\$0
$P(X)$	$\frac{1}{6}$			



$$E(X) =$$

Interpret the expected value.

2. In a raffle, there is 1 prize of \$1,000, 2 prizes of \$500, 4 prizes of \$250, and 10 prizes of \$100. One-thousand tickets are sold at \$10 each. The prizes are awarded by randomly selecting the tickets. Determine your expected net winnings from one ticket.

Let X be your net winnings from one ticket.

X	\$990	\$490	\$240	\$90	-\$10
$P(X)$	$\frac{1}{1,000}$				

$$E(X) =$$



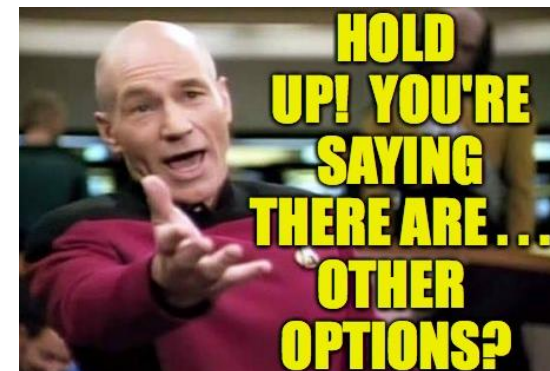
Interpret the expected value.

Another option:

Let Y be your gross winnings from one ticket.

Y	\$1,000	\$500	\$250	\$100	\$0
$P(Y)$	$\frac{1}{1,000}$				

$$E(X) = E(Y) - \$10$$



3. A 25-year-old can purchase a \$10,000 one-year life insurance policy for \$100. The probability of a person dying at age 25 is .002. Determine the expected profit to the insurance company from the sale of one policy.

Let X be the profit from the sale of one policy for the insurance company.

X	-\$9,900	\$100
$P(X)$.002	



$$E(X) =$$

Interpret the expected value.

One last example: Determine the expected value of the random variable with the following histogram.

